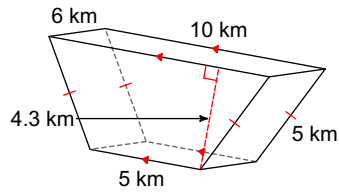


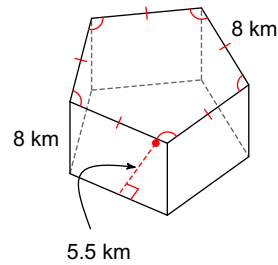
Surface Area and Volume of Prisms

Find the lateral area of each figure. Round your answers to the nearest hundredth, if necessary.

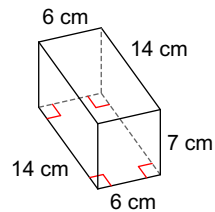
1)



2)

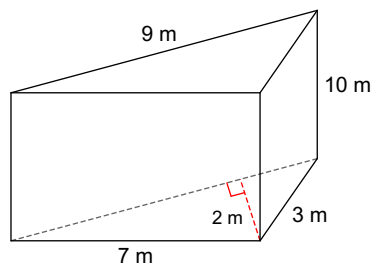


3)

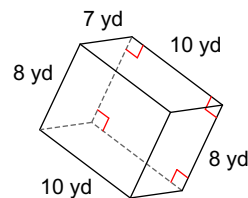


Find the surface area of each figure. Round your answers to the nearest hundredth, if necessary.

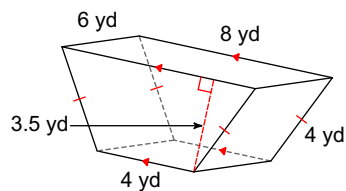
4)



5)

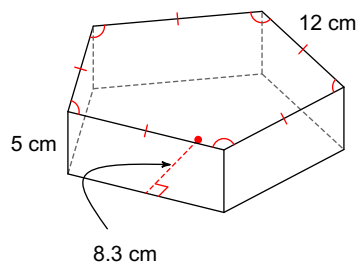


6)

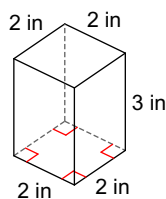


Find the lateral area and surface area of each figure. Round your answers to the nearest hundredth, if necessary.

7)

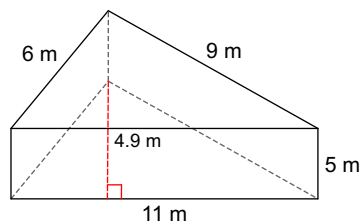


8)

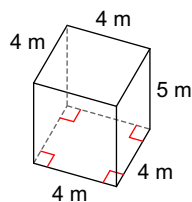


Find the volume of each figure. Round your answers to the nearest hundredth, if necessary.

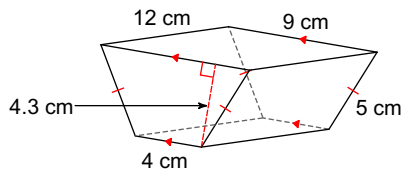
9)



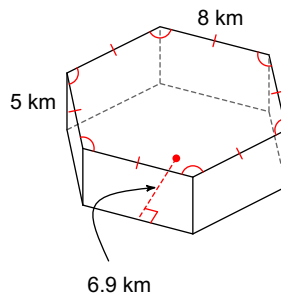
10)



11)



12)



Answers to Surface Area and Volume of Prisms (ID: 1)

- | | | | |
|-------------------------|-----------------------|--|--|
| 1) 150 km^2 | 2) 320 km^2 | 3) 280 cm^2 | 4) 208 m^2 |
| 5) 412 yd^2 | 6) 162 yd^2 | 7) 300 cm^2 ; 798 cm^2 | 8) 24 in^2 ; 32 in^2 |
| 9) 134.75 m^3 | 10) 80 m^3 | 11) 335.4 cm^3 | 12) 828 km^3 |